

5.22 and 5.23 For the beam and loading shown, consider section $n-n$ and determine the shearing stress at (a) point a , (b) point b .

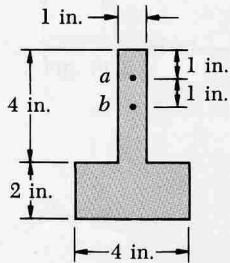
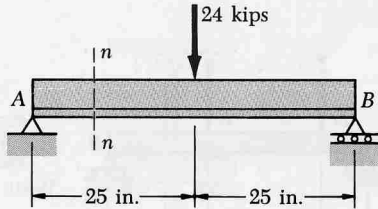


Fig. P5.22

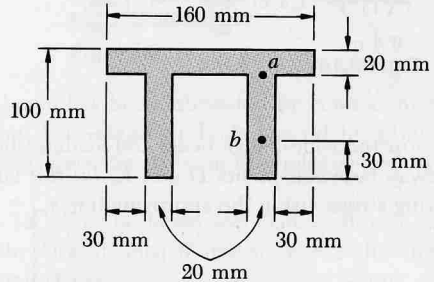
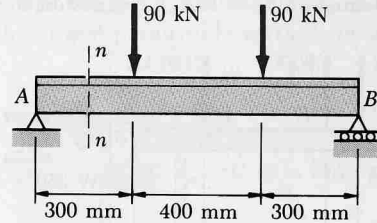


Fig. P5.23